

Hall Ticket Number

--	--	--	--	--	--	--	--	--	--

Q.B.No.

6	3	1	4	3	2
---	---	---	---	---	---

Booklet Code :

B

Marks : 100

Time : 120 minutes

3TS1C

Signature of the Candidate

Signature of the Invigilator

INSTRUCTIONS TO THE CANDIDATE

(Read the Instructions carefully before Answering)

1. Separate Optical Mark Reader (OMR) Answer Sheet is supplied to you along with Question Paper Booklet. Please read and follow the instructions on the OMR Answer Sheet for marking the responses and the required data.
2. The candidate should ensure that the Booklet Code printed on OMR Answer Sheet and Booklet Code supplied are same.
3. **Immediately on opening the Question Paper Booklet by tearing off the paper seal, please check for (i) The same booklet code (A/B/C/D) on each page, (ii) Serial Number of the questions (1-100), (iii) The number of pages and (iv) Correct Printing.** In case of any defect, please report to the invigilator and ask for replacement of booklet with same code within five minutes from the commencement of the test.
4. Electronic gadgets like Cell Phone, Calculator, Watches and Mathematical/Log Tables are not permitted into the examination hall.
5. **There will be $\frac{1}{4}$ negative mark for every wrong answer.** If the response to the question is left blank without answering, there will be no penalty of negative mark for that question.
6. Using Blue/Black ball point pen to darken the appropriate circles of (1), (2), (3) or (4) in the OMR Answer Sheet corresponding to correct or the most appropriate answer to the concerned question number in the sheet. Darkening of more than one circle against any question automatically gets invalidated and will be treated as wrong answer.
7. Change of an answer is NOT allowed.
8. Rough work should be done only in the space provided in the Question Paper Booklet.
9. Return the OMR Answer Sheet and Question Paper Booklet to the invigilator before leaving the examination hall. Failure to return the OMR sheet and Question Paper Booklet is liable for criminal action.

This Booklet consists of 13 Pages for 100 Questions + 2 Pages of Rough Work + 1 Title Page i.e. Total 16 Pages.

3TS1C

Booklet Code **B**

SPACE FOR ROUGH WORK

Time : 2 Hours

Marks : 100

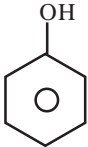
Instructions :

- i) Each question carries **one** mark and $\frac{1}{4}$ negative mark for every wrong answer.
- ii) Choose the correct or most appropriate answer from the given options to the following questions and darken, with Blue/Black Ball Point Pen, the corresponding digit **1, 2, 3** or **4** in the circle pertaining to the question number concerned in the OMR Answer Sheet, separately supplied to you.

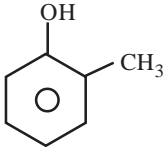
1. Consider a plane wave of light of wavelength ' λ ' incident on an opaque screen with a circular opening of diameter ' a '. If the circular opening has to behave like a point source of light, the relation between ' λ ' and ' a ' should be
 (1) $\lambda \gg a$ (2) $\lambda = a$ (3) $\lambda \ll a$ (4) $\lambda = 2a$
-
2. Choose the sequence containing all incorrect statements
 A) Speed of sound depends upon temperature of the sound source
 B) Loud sound can travel a longer distance due to higher amplitude
 C) To hear a distinct echo each time, interval between the original and reflected sound must be at least 0.1 sec.
 D) Tympanic membrane of human ear converts sound vibrations into electric signals
 (1) A, B and D (2) A, C and D (3) A and D (4) B and C
-
3. For an object placed at 20 cm from a symmetrical lens of refractive index 1.65, if the lateral magnification of the object is $-\frac{1}{4}$, the lens type and image character are
 (1) converging lens, virtual image (2) diverging lens, virtual image
 (3) converging lens, real image (4) diverging lens, real image
-
4. A car is moving with a speed 54 km/hr when the driver sees the red signal 40 m ahead. The car can be slowed with a deceleration 5m/s^2 . If the reaction time of the driver is 0.2 sec, what is the stopping distance.
 (1) 25.5 m (2) 22.5 m (3) 50.6 m (4) 40 m
-
5. A box suspended by a rope is pulled to one side by a horizontal force. The tension in the rope
 (1) is unchanged
 (2) is less than before
 (3) is greater than before
 (4) may be any of the above, depends on how strong the force is
-
6. When F_a, F_b, F_c forces are acting on a particle of mass ' m ' such that F_b and F_c are mutually perpendicular, then the particle remains stationary. If the force F_a is now removed, then the magnitude of acceleration of the particle is:
 (1) $\frac{F_a}{m}$ (2) $\frac{F_b F_c}{m}$ (3) $\frac{F_b + F_c}{m}$ (4) $\frac{F_c - F_b}{m}$

7. A curve of radius 30 m is to be banked so that a car may make the turn at a speed of 13 m/s without depending on friction. What must be the approximate slope of the roadway? [use $g = 10 \text{ m/s}^2$]
- (1) 45° (2) 30° (3) 20° (4) 60°
-
8. A satellite of mass m , initially at rest on the earth, is launched into a circular orbit at a height equal to two times of the radius of the earth. The minimum energy required is: (R is the radius of the earth, g is the acceleration due to gravity)
- (1) $\frac{3}{4}mgR$ (2) mgR (3) $\frac{1}{2}mgR$ (4) $\frac{5}{6}mgR$
-
9. Which one is true about earth's magnetism?
- (1) Earth's magnetic field is approximately 0.1 gauss
(2) Angle of dip at poles is 0°
(3) The angle between magnetic meridian and geographic meridian at a place is 73°
(4) Earth's magnetic field is approximately 1T
-
10. In which of the following a permanent magnet is not used?
- (1) Loud-speakers (2) transformers (3) magnetoes (4) energy meters
-
11. A bar magnet is divided into two pieces. Which of the following statement is true about the force between the broken pieces if they face each other with a small separation?
- (1) There is an electric repulsive force between the broken pieces
(2) There is a magnetic attractive force between the broken pieces
(3) There is a magnetic repulsive force between the broken pieces
(4) There is no force between the broken pieces
-
12. A straight wire of diameter 0.5 mm carrying a current of 10 A is replaced by another wire of 1 mm diameter carrying same current. What is the strength of the magnetic field at a given point outside the wire
- (1) $\frac{1}{4}$ th of the earlier value (2) $\frac{1}{2}$ of the earlier value
(3) same as the earlier value (4) two times the earlier value
-
13. When the same potential difference is used to accelerate a proton and an electron, then
- (1) The proton has the higher velocity (2) The electron has more kinetic energy
(3) The proton has more kinetic energy (4) The electron has the higher velocity
-
14. A copper wire has a resistance of 10Ω at 20°C . What will be its resistance at 80°C . [$\alpha_{\text{copper}} = 0.004/^\circ\text{C}$, α is the temperature coefficient of resistance]
- (1) 3.4Ω (2) 10.0Ω (3) 11.6Ω (4) 12.4Ω
-
15. Three charges each equal to +5 C are placed at the corner of an equilateral triangle. If the force between any two charges be $2F$, then the net force on either will be
- (1) $2F$ (2) $3F$ (3) $2\sqrt{3}F$ (4) $3\sqrt{2}F$

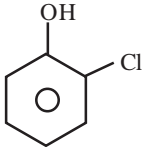
16. A resistor R connected to a battery dissipates energy at the rate P. If another resistor is connected in parallel with R, then the power dissipated by R is
- Less than P
 - P
 - More than P
 - Can be either more or less depending on the value of resistances
-
17. A radio set operates at 6V DC. A transformer with 18 turns in the secondary coil is used to step down the input 220V AC emf to 6V AC emf. This AC emf is then rectified by another circuit to give 6V DC which is fed to the radio. Find the number of turns in the primary coil.
- 500
 - 560
 - 600
 - 660
-
18. A 100 turn coil whose resistance is $6\ \Omega$ encloses an area of $80\ \text{cm}^2$. How rapidly should a magnetic field parallel to its axis change to induce a current of 1 mA in the coil.
- $7.5 \times 10^{-3}\ \text{T/s}$
 - $9.3 \times 10^{-3}\ \text{T/s}$
 - $8.9 \times 10^{-3}\ \text{T/s}$
 - $6.6 \times 10^{-3}\ \text{T/s}$
-
19. A proton and an α particle having same momentum are fired through a magnetic field. If R_1 and R_2 respectively are the radii of their circular paths, then $\frac{R_1}{R_2} =$
- $\frac{1}{2}$
 - $\frac{1}{\sqrt{2}}$
 - 2
 - $\sqrt{2}$
-
20. A photo-sensitive material would emit electrons if excited by photons beyond a threshold. Which of the following will be increased to cross the threshold?
- Intensity of light
 - Wavelength of light
 - Frequency of light
 - Voltage applied to the light source
-
21. Half-life period of a radioactive element is 50 years. What fraction of the element will remain after 100 years.
- $\frac{1}{16}$
 - $\frac{1}{8}$
 - $\frac{1}{4}$
 - $\frac{1}{2}$
-
22. Which isotope is used to remove the brain tumors and treatment of cancer?
- U-235
 - Th-234
 - Na-24
 - Co-60
-
23. In a radioactive process $^{238}\text{U}_{92}$ transform to a stable end product $^{206}\text{Pb}_{82}$. How many α and β particles are emitted in this process?
- 5 and 12
 - 8 and 6
 - 16 and 6
 - 10 and 12
-
24. State the number of significant digits for measurement of mass of a granite block of $M = 2.40 \times 10^6\ \text{kg}$.
- 2
 - 3
 - 6
 - 9

25. If the unit of length, mass and time of a particular system are chosen to be 10 cm, 100 gm and 10 sec respectively, then the unit of force in this system will be equivalent to:
 (1) 10^4 N (2) 10^{-3} N (3) 10^5 N (4) 10^{-4} N
-
26. Which of the following is the most polluted river in the world
 (1) Thames (2) Nile (3) Ganga (4) Amazon
-
27. CNG is a/an
 (1) clean fuel (2) incombustible substance
 (3) polluted fuel (4) toxic fuel
-
28. The most serious inorganic contaminants in the drinking water on a world wide basis as recognized by World Health Organization (WHO) are:
 (1) Chloride and Sulfide (2) Fluoride and Lanthanide
 (3) Arsenic and Fluoride (4) Nitrate and Chloride
-
29. Which type of satellites cover the entire earth surface at regular time intervals
 (1) Polar orbiting satellite (2) Geostationary satellite
 (3) Asynchronous satellite (4) Low-earth orbit satellites
-
30. Modern astronomers have divided the whole sky into:
 (1) 77 constellations (2) 88 constellations
 (3) 128 constellations (4) 108 constellations
-
31. Which mirror is used by dentists to examine cavities in the teeth?
 (1) Plane mirror (2) A combination of plane and convex
 (3) Convex mirror (4) Concave mirror
-
32. A beam of monochromatic light of wavelength 4000 \AA in air travels in water (μ (refractive index) = $\frac{4}{3}$). What will be the wavelength of light in the water?
 (1) 3000 \AA (2) 3150 \AA
 (3) 2800 \AA (4) 4000 \AA
-
33. If Helium gas is contained in a 1 cm^3 volume at 10^5 Pa/pressure and kept at 273 K temperature, then the approximate number of Helium atoms are ($K_B = 1.38 \times 10^{-23} \text{ m}^2 \text{ kg s}^{-2} \text{ K}^{-1}$)
 (1) 3×10^{23} (2) 6×10^{26} (3) 6×10^{23} (4) 3×10^{19}
-
34. Which of the following is most and least acidic respectively
- 

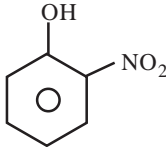
a)



b)



c)



d)
- (1) (c), (a) (2) (d), (b) (3) (c), (d) (4) (b), (c)
-

35. The shapes of molecules and their chemical formula are given in two columns. Which of the options give the correct match of molecules and their shapes.

Chemical formula	Shape
a) C_2H_2	i) Distorted tetrahedron / See saw
b) PCl_5	ii) T-shape
c) SF_4	iii) Trigonal bipyramidal
d) ClF_3	iv) Linear
(1) a-(i), b-(ii), c-(iii), d-(iv)	(2) a-(iii), b-(i), c-(ii), d-(iv)
(3) a-(iv), b-(iii), c-(i), d-(ii)	(4) a-(ii), b-(iv), c-(iii), d-(i)

36. In compound 'A' all the bond angles are exactly $109^\circ 28'$. 'A' is

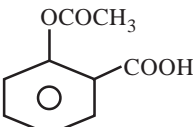
- | | |
|----------------|--------------------------|
| (1) Chloroform | (2) Carbon tetrachloride |
| (3) Iodoform | (4) Chloromethane |

37. The IUPAC name of $CH_3COCH(CH_3)_2$ is

- | | |
|------------------------------|-------------------------|
| (1) 4-methylisopropyl ketone | (2) 3-methyl-2-butanone |
| (3) Isopropylmethyl ketone | (4) 2-methyl-3-butanone |

38. Identify the compound that exhibits tautomerism

- | | |
|-----------------|-----------------|
| (1) 2-Pentanone | (2) Phenol |
| (3) 2-butene | (4) Lactic acid |

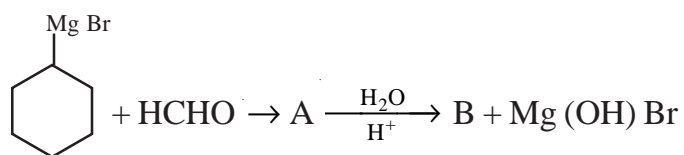
39. The compound  is used as

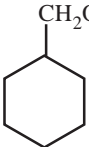
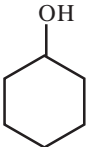
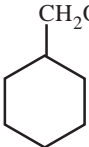
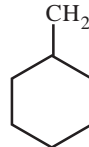
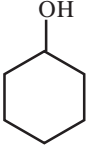
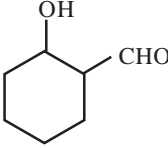
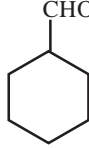
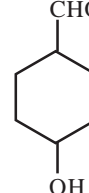
- | | |
|-----------------|----------------|
| (1) antiseptic | (2) antibiotic |
| (3) antipyretic | (4) pesticide |

40. Which of the following are correct

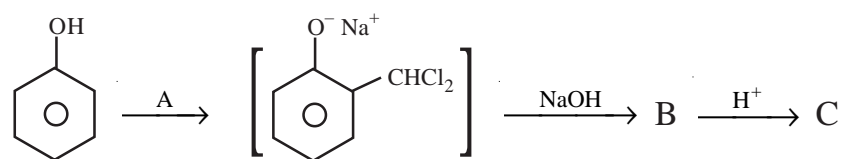
- | | |
|---|-------------|
| a) The molecular formula of both Glucose and Fructose is $C_6H_{12}O_6$ | |
| b) The six membered cyclic structure of Glucose is called pyranose | |
| c) Commercial Glucose is obtained by hydrolysis of starch | |
| d) Maltose is a disaccharide | |
| (1) a, b | (2) a, b, c |
| (3) a, b, c, d | (4) b, d |

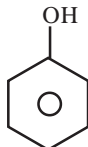
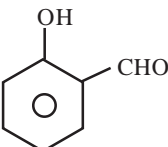
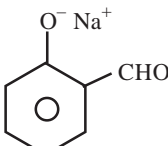
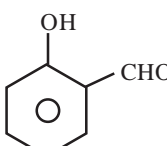
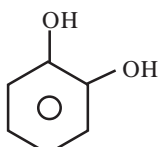
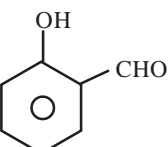
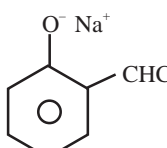
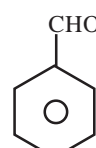
41. A and B in the following reaction are respectively



- (1)  ;  (2)  ; 
- (3)  ;  (4)  ; 

42. Identify A, B, C respectively in the following reaction.



- (1) CHCl_3 ,  ; 
- (2) $\text{CHCl}_3 / \text{NaOH}_{(\text{aq})}$;  ; 
- (3) Cl_2 ;  ; 
- (4) Cl_2 ;  ; 

43. Assertion (A) : 2, 3 dimethyl 2-butene is more stable than 2-butene
Reason (R) : The stability is due to hyper conjugation
(1) Both (A) and (R) are correct (2) (A) is correct but (R) is wrong
(3) (A) is wrong but (R) is correct (4) Both (A) and (R) are wrong
-
44. Which of the following metals can be refined by the electrolysis of an aqueous solution of its complex salt with impure metal at the anode and a strip of pure metal at the cathode.
(1) Indium (2) Zinc (3) Tin (4) Copper
-
45. A metal is left exposed to the atmosphere for some time. It gets coated with green carbonate. The metal must be
(1) Silver (2) Zinc (3) Copper (4) Iron
-
46. In which of the following is the corrosion of iron the most rapid.
(1) Pure water (2) Pure oxygen
(3) Air and moisture (4) Air and saline water
-
47. Which of the following does not represent(s) the STP conditions?
a) 273 K and 101.3 kPa b) 273 K and 760 mm Hg
c) 298 K and 101.3 Pa d) 298 K and 14.7 psi
(1) c, d (2) a, c, d (3) a, d (4) a, c
-
48. In gas chromatography, the basis for separation of the given compounds is due to the difference in
(1) Molecular weight (2) Concentration
(3) Partition coefficients (4) Conductivity
-
49. Heating a mixture of Cu_2O and Cu_2S will give
(1) $\text{Cu} + \text{SO}_2$ (2) $\text{Cu} + \text{SO}_3$
(3) $\text{CuO} + \text{CuS}$ (4) Cu_2SO_3
-
50. The decomposition of KClO_3 to KCl and O_2 on heating is an example of
(1) Neutralization reaction (2) Intermolecular redox reaction
(3) Intramolecular redox reaction (4) Auto redox reaction
-
51. Which of the following alkali metals has the highest melting point?
(1) Na (2) Li (3) Rb (4) K
-
52. The species present in water when CO_2 is dissolved in water
(1) H_2CO_3 , CO_3^{2-} (2) CO_3^{2-} , HCO_3^-
(3) CO_2 , H_2CO_3 (4) CO_2 , H_2CO_3 , HCO_3^- , CO_3^{2-}
-
53. The conjugate acid of NH_2^- is
(1) NH_4^+ (2) NH_2OH (3) NH_3 (4) N_2H_4

54. Assertion (A) : In bleaching powder, oxidation state of the metal is +2.
Reason (R) : In bleaching powder, chlorine is in both +1 and -1 oxidation states.
(1) Both (A) and (R) are correct and (R) is the correct explanation of (A)
(2) Both (A) and (R) are correct and (R) is not the correct explanation of (A)
(3) (A) is correct, but (R) is wrong
(4) (A) is wrong, but (R) is correct
-
55. Consider the following reaction
$$\text{NO}_2^- + \text{H}^+ + xe^- \rightarrow \text{NO} + \text{H}_2\text{O}$$

find the value of 'x', after balancing the equation
(1) 4 (2) 3 (3) 2 (4) 1
-
56. Which of the following species is diamagnetic in nature?
(1) He_2^+ (2) H_2^+ (3) H_2^- (4) H_2
-
57. According to Bohr's theory, the angular momentum of an electron in 5th orbit is
(1) $25 \frac{h}{\pi}$ (2) $10 \frac{h}{\pi}$ (3) $1.0 \frac{h}{\pi}$ (4) $2.5 \frac{h}{\pi}$
-
58. The value of the 'spin only' magnetic moment for one of the following configurations is 2.84 B.M. The correct one is
(1) d^4 (in strong ligand field)
(2) d^4 (in weak ligand field)
(3) d^3 (in weak as well as in strong ligand fields)
(4) d^5 (in strong ligand field)
-
59. Heisenberg's uncertainty principle rules out the exact simultaneous measurement of
(1) probability and intensity (2) energy and velocity
(3) charge density and radius (4) position and momentum
-
60. The energy of an electron in an atomic orbital of a multielectron atom depends upon
(1) the principal quantum number only
(2) the principal and azimuthal quantum numbers only
(3) the principal, magnetic and azimuthal quantum numbers only
(4) the principal, azimuthal, magnetic and spin quantum numbers only
-
61. Law of octaves was proposed by
(1) Dobereiner (2) Newland
(3) Mandaleev (4) Rutherford
-
62. Which of the following is not the correct group?
(1) C, Si, Ge, Se, Pb (2) N, P, As, Sb, Bi
(3) Be, Mg, Ca, Sr (4) B, Al, Ga, In, Tl
-

63. Supposing that $Z = 117$ is discovered, where would you like to place this element
(1) Alkali metals (2) Inert gases
(3) Halogen family (4) Oxygen family
-
64. The Mandaleev's periodic table arrangement is based on
(1) atomic number (2) atomic weight
(3) ionic size (4) number of isotopes
-
65. Oxidation state and covalency respectively of Aluminium in $[\text{AlCl}(\text{H}_2\text{O})_5]^{2+}$ is
(1) +6, 3 (2) +3, 6 (3) +3, 5 (4) +5, 3
-
66. Which of the following compound does not follow the octet rule?
(1) CO_2 (2) PCl_3 (3) ICl (4) ClF_3
-
67. Which of the following medical procedures are suggested when a woman cannot produce viable/fertile ova
(1) In Vitro Fertilisation and Embryo Transfer (IVF-ET)
(2) Artificial Insemination (AI)
(3) Zygote Intrafallopian Transfer (ZIFT)
(4) Gamete Intrafallopian Transfer (GIFT)
-
68. pH range of the gastric juice in humans is
(1) 1 - 2 (2) 4 - 6 (3) 7 - 9 (4) 10 - 14
-
69. The region of the vertebrate eye where the optic nerve passes out of the retina is called the
(1) Fovea (2) Cornea (3) Blind spot (4) Retina
-
70. Match the following:
a) Bolus I) Protein deficiency
b) Amylase II) Saliva
c) Kwashiorkar III) Bile
d) Bilirubin IV) Polysaccharide
Choose the correct answer
- | | (a) | (b) | (c) | (d) |
|-----|-----|-----|-----|-----|
| (1) | II | I | III | IV |
| (2) | I | II | IV | III |
| (3) | I | III | II | IV |
| (4) | II | IV | I | III |
-
71. The transparent lens in the human eye is held in its place by:
(1) Ligaments attached to the ciliary body (2) Ligaments attached to the iris
(3) Smooth muscles attached to the iris (4) Rectus and oblique muscles
-

72. An example of lentic ecosystem is
(1) Rivers (2) Springs (3) Estuary (4) Lakes
-
73. The functional role of an organism in an ecosystem is termed as
(1) Edge effect (2) Ecotone
(3) Ecological Niche (4) Ecological pyramid
-
74. World Environment day is observed on
(1) February 10th (2) September 7th (3) June 5th (4) July 25th
-
75. Green house gases are released into the environment and cause global warming. Identify one of the following gases which is not a green house gas
(1) Sulphur dioxide (2) Methane
(3) Carbon monoxide (4) Fluorochloro carbons
-
76. Profundal zone is
(1) Shallow part of the lake closer to the shore
(2) An open water away from the shore
(3) A zone effective of light penetration
(4) The deep water area beyond the depth of effective light penetration
-
77. The following gas is responsible for protecting the humans from harmful ultraviolet rays
(1) Oxygen (2) Ozone (3) Chlorine (4) Methane
-
78. How many pairs of contrasting characters were studied by Mendel in his experiment on Peas?
(1) 5 (2) 7 (3) 2 (4) 9
-
79. In sickle-cell anemia, the following point mutation is seen in beta globin polypeptide chains of haemoglobin.
(1) Glutamine is replaced in the 6th position by valine
(2) Glutamine is replaced in the 6th position by alanine
(3) Glutamic acid is replaced in the 6th position by valine
(4) Glutamic acid is replaced in the 6th position by alanine
-
80. Trisomy is the condition in which
(1) an extra chromosome is added (2) a chromosomal pair is added
(3) a chromosome is deleted (4) a chromosome is replaced
-
81. Disorders caused due to absence/excess of one/more chromosome.
(1) Mendelian disorder (2) Multiple allelism
(3) Dominance (4) Aneuploidy
-
82. Biological relationship between parents and their children can be accurately determined by DNA finger printing. Basis for DNA finger printing is
(1) Chromatin structure
(2) Repetitive DNA
(3) Restriction and endonuclease polymorphism
(4) RNA structure

83. Embryological support for evolution was proposed by:
(1) Ernst Heckel (2) Karl Ernst Von Baer
(3) Alfred Wallace (4) Charles Darwin
-
84. The development of heart in birds and mammals is an example of
(1) Homology (2) Convergent evolution
(3) Adaptive radiation (4) Biogenetic law
-
85. Evolution of life forms driven by use and disuse of organs was proposed by
(1) Ernst Hackel (2) Thomas Maltus
(3) Charles Darwin (4) Lamarck
-
86. Allopatric speciation occurs due to:
(1) Physiological barrier (2) Geographical isolation
(3) Niche change (4) Genetic drift
-
87. Assertion (A) : Life expectancy of human beings has not dramatically changed over the years.
Reason (R) : The discovery of antibiotics, synthetic or plant derived drugs, anaesthetics, diagnostic procedures etc., have changed the medical practice on one hand and improved the human health on the other.
- (1) Both (A) and (R) are true and (R) is the correct explanation of (A).
(2) Both (A) and (R) are true, but (R) is not the correct explanation of (A).
(3) (A) is true, but (R) is false.
(4) (A) is false, but (R) is true.
-
88. Match the following:
- | List - I | List - II |
|--|----------------------------|
| a) Bacteria arranged in chain | I) <i>Cocci</i> |
| b) Several bacteria are arranged irregularly forming a bunch | II) <i>Streptococcus</i> |
| c) Bacteria are arranged in rectangular frames | III) <i>Staphylococcus</i> |
| d) Spherical bacterium | IV) <i>Sarcina</i> |
- The correct answer is
- | | (a) | (b) | (c) | (d) |
|-----|-----|-----|-----|-----|
| (1) | II | I | IV | III |
| (2) | III | II | I | IV |
| (3) | II | III | IV | I |
| (4) | I | IV | III | II |
-

89. Match the following:

List - I

- a) Phycomycetes
- b) Deuteromycetes
- c) Basidiomycetes
- d) Ascomycetes

List - II

- I) *Alternaria*
- II) *Puccinia*
- III) *Neurospora*
- IV) *Albugo*

The correct answer is

- | | (a) | (b) | (c) | (d) |
|-----|-----|-----|-----|-----|
| (1) | IV | III | I | II |
| (2) | III | II | IV | I |
| (3) | IV | I | II | III |
| (4) | II | IV | I | III |

90. Which of the following is responsible for modifying, sorting and packaging of proteins

- (1) Lysosomes
- (2) Endoplasmic reticulum
- (3) Golgi complex
- (4) Ribosomes

91. Assertion (A) : Lipid soluble compounds pass through the membrane more easily than water soluble compounds.

Reason (R) : Because, membrane is made up of lipids with highly unsaturated and hydrophilic hydrocarbon chains.

- (1) Both (A) and (R) are true and (R) is the correct explanation of (A).
- (2) Both (A) and (R) are true, but (R) is not the correct explanation of (A).
- (3) (A) is true, but (R) is false.
- (4) (A) is false, but (R) is true.

92. Number of polypeptides encoded by human mitochondrial genome is

- (1) 37
- (2) 22
- (3) 13
- (4) 2

93. Which one of the following phases of Meiosis-I is recognised by the dissolution of the synaptonemal complex and the tendency of the homologous chromosomes of the bivalents to separate from each other except at the sites of crossovers.

- (1) Pachytene
- (2) Zygotene
- (3) Diplotene
- (4) Diakinesis

94. Match the following:

List - I

- a) Hypostomatic
- b) Potato type stomata
- c) Alfalfa type stomata
- d) Isostomatic stomata

List - II

- I) *Avena Sativa* (Oats)
- II) Mustard
- III) Mulberry
- IV) Tomato

The correct answer is

- | | (a) | (b) | (c) | (d) |
|-----|-----|-----|-----|-----|
| (1) | II | III | IV | I |
| (2) | III | II | I | IV |
| (3) | IV | I | II | III |
| (4) | III | IV | II | I |

95. Secondary xylem and phloem in a dicot stem are produced by
- | | |
|----------------------|------------------------|
| (1) Apical meristems | (2) Vascular cambium |
| (3) Phellogen | (4) Axillary meristems |
-

96. Which one of the following statements is correct?
- (1) Ovules are not enclosed by ovary wall in gymnosperms
 - (2) *Selaginella* is heterosporous, while *salvinia* is homosporous
 - (3) Horsetails are gymnosperms
 - (4) Stems are usually unbranched in both *Cycas* and *Cedrus*
-

97. The Indian Agricultural Research Institute, New Delhi has released:

List - I	List - II
a) Vitamin A enriched	I) Broad bean
b) Vitamin C enriched	II) Pumpkin
c) Calcium enriched	III) Bitter gourd
d) Protein enriched	IV) Spinach

The correct answer is

	(a)	(b)	(c)	(d)
(1)	II	IV	I	III
(2)	II	III	IV	I
(3)	III	I	II	IV
(4)	IV	II	III	I

98. The maximum volume of air a person can breathe in after forced expiration is known as
- | | |
|----------------------------------|-------------------------|
| (1) Functional residual capacity | (2) Total lung capacity |
| (3) Inspiratory capacity | (4) Vital capacity |
-

99. Which of the following statements are 'INCORRECT' for 'Pigeon's Milk'?

- (1) It is composed of water, fat, casein and lactose
 - (2) It is produced by female pigeon
 - (3) Prolactin hormone stimulates its secretion
 - (4) It will be regurgitated to feed young pigeons
-

100. Match the following:

List - I (<u>Placenta type</u>)	List - II (<u>Animal</u>)
a) Syndesmochorial	I) Humans
b) Endotheliochorial	II) Rabbits
c) Haemochorial	III) Dogs
d) Heamoendothelial	IV) Camels

The correct answer is

	(a)	(b)	(c)	(d)
(1)	IV	II	III	I
(2)	I	III	IV	II
(3)	IV	III	I	II
(4)	II	IV	I	III

3TS1C

Booklet Code **B**

SPACE FOR ROUGH WORK
