

Hall Ticket Number

--	--	--	--	--	--

Q.B.No.

0	1	1	4	3	2
---	---	---	---	---	---

Booklet Code :

B

Marks : 100

Time : 120 minutes

P11

Signature of the Candidate

Signature of the Invigilator

INSTRUCTIONS TO THE CANDIDATE

(Read the Instructions carefully before Answering)

1. Separate Optical Mark Reader (OMR) Answer Sheet is supplied to you along with Question Paper Booklet. Please read and follow the instructions on the OMR Answer Sheet for marking the responses and the required data.
2. The candidate should ensure that the Booklet Code printed on OMR Answer Sheet and Booklet Code supplied are same.
3. **Immediately on opening the Question Paper Booklet by tearing off the paper seal, please check for (i) The same booklet code (A/B/C/D) on each page, (ii) Serial Number of the questions (1-100), (iii) The number of pages and (iv) Correct Printing.** In case of any defect, please report to the invigilator and ask for replacement of booklet with same code within five minutes from the commencement of the test.
4. Electronic gadgets like Cell Phone, Calculator, Watches and Mathematical/Log Tables are not permitted into the examination hall.
5. **There will be $\frac{1}{4}$ negative mark for every wrong answer.** If the response to the question is left blank without answering, there will be no penalty of negative mark for that question.
6. Using Blue/Black ball point pen to darken the appropriate circles of (1), (2), (3) or (4) in the OMR Answer Sheet corresponding to correct or the most appropriate answer to the concerned question number in the sheet. Darkening of more than one circle against any question automatically gets invalidated and will be treated as wrong answer.
7. Change of an answer is NOT allowed.
8. Rough work should be done only in the space provided in the Question Paper Booklet.
9. Return the OMR Answer Sheet and Question Paper Booklet to the invigilator before leaving the examination hall. Failure to return the OMR sheet and Question Paper Booklet is liable for criminal action.

This Booklet consists of 21 Pages for 100 Questions + 2 Pages of Rough Work + 1 Title Page i.e. Total 24 Pages.

P11

Booklet Code **B**

SPACE FOR ROUGH WORK

Time : 2 Hours**Marks : 100****Instructions :**

- i) Each question carries **one** mark and $\frac{1}{4}$ negative mark for every wrong answer.
- ii) Choose the correct or most appropriate answer from the given options to the following questions and darken, with Blue/Black Ball Point Pen, the corresponding digit **1, 2, 3** or **4** in the circle pertaining to the question number concerned in the OMR Answer Sheet, separately supplied to you.

-
1. Match the following prominent buildings in Hyderabad with the architectural style with which they were built

List - I

- a) Osmania University
b) Osmania General Hospital
c) High Court
d) Assembly Hall

List - II

- i) Mughal Style
ii) Saracenic Rajastani style
iii) Synthesis of modern, medieval and ancient architectural styles
iv) Indo-Saracenic style

The correct answer is:

- (1) a-iv, b-ii, c-iii, d-i
(2) a-iii, b-i, c-iv, d-ii
(3) a-ii, b-iii, c-i, d-iv
(4) a-i, b-iv, c-ii, d-iii

-
2. Name the famous painter in the court of Nizam Ali Khan (1762-1803) who had an annual Jagir of Rs. 12,000 and whose paintings are displayed in Salar Jang Museum.

- (1) Raja Ram Baksh
(2) Rai Rayan
(3) Rai Venkatachallam
(4) Raja Nanakram

-
3. Match the following dancers names with their dance forms

- | | |
|------------------|------------------------|
| A) Bharat Natyam | i) Vempati Chinasatyam |
| B) Kathak | ii) Kalamandalam Gopi |
| C) Kuchipudi | iii) Rukmini Arundale |
| D) Kathakali | iv) Damayanti Joshi |
- (1) A-iv, B-ii, C-iii, D-i
(2) A-iii, B-i, C-iv, D-ii
(3) A-i, B-iv, C-ii, D-iii
(4) A-iii, B-iv, C-i, D-ii

4. Match the following authors with their works.

List - I

- a) Jayapa Senami
- b) Gona Buddha Reddy
- c) Tikkana
- d) Palkuriki Somanadha

(1) a-iv, b-i, c-iii, d-ii

(3) a-ii, b-i, c-iv, d-iii

List - II

- i) Nirvachanothara Ramayanam
- ii) Basava Puranam
- iii) Githa Rathnavali
- iv) Ranganatha Ramayanam

(2) a-iii, b-iv, c-i, d-ii

(4) a-iii, b-iv, c-ii, d-i

5. Parker solar probe launched by NASA to study the atmosphere of

(1) Moon

(2) Sun

(3) Jupiter

(4) Mars

6. Zika virus is spread by which of the following

(1) Dog bite

(2) Honey bee bite

(3) Mosquito bite

(4) Ant bite

7. Maximum permissible limit of fluoride in drinking water is

(1) 0.5 mg/L

(2) 1.0 mg/L

(3) 1.5 mg/L

(4) 2.0 mg/L

8. Which one of the following gases in environment causes global warming?

(1) Oxygen

(2) Nitrogen

(3) Hydrogen

(4) Methane

9. Which of the following statements are correct about environment?

A) The concept of biodiversity hotspots was originated by Norman Myers.

B) Brundtland Commission was formally known as the 'World Commission on Environment and Development'.

C) Sustainable development meets the needs of the present with compromising the ability of future generations to meet their own needs.

The correct answer is:

(1) A and B only

(2) B and C only

(3) A and C only

(4) A, B and C

10. Examine the following statements about the national disaster management:

A) 'National Disaster Management Act' was enacted on 2nd October 2015.

B) The Prime Minister of India is the Chairman of the 'National Disaster Management Authority' (NDMA).

C) The headquarters of the NDMA is located in Hyderabad.

Choose the **incorrect** statement/s:

(1) A, B and C

(2) A and B only

(3) B and C only

(4) A and C only

11. 'Agenda 21' is the result of which Earth Summit?

- (1) Stockholm Conference
- (2) Rio Summit
- (3) UN Decade for Sustainable Development
- (4) Brundtland Commission

12. Which of the following statements are related to 'Gender Empowerment Measure' (GEM)?

- A) Men and women's participation share in Parliamentary seats
- B) Economic participation and decision making power of men and women
- C) Access to information and communication of men and women
- D) Power over economic resources of men and women

The correct statements are:

- (1) A, B and C only
- (2) B, C and D only
- (3) A, B and D only
- (4) A and D only

13. Which one of the following statements is/are correct with regard to the average growth rates of GSDP of Telangana state and GDP of India for the period between 2004-05 to 2013-14?

- I) The average growth rates of three sectors of Telangana state are relatively higher than the national average.
- II) Among the three sectors, the growth rate of service sector is comparatively higher in both the state of Telangana and India.
- III) The state of Telangana registered lower average growth rate against national average.

Choose the correct answer:

- (1) I and II only
- (2) I and III only
- (3) II and III only
- (4) III only

14. Which of the following statements relating to poverty and unemployment is/are correct?

- A) Poverty, unemployment and income inequalities are closely related to each other.
- B) Unemployment is more deeper than poverty.
- C) Generally higher the level of inequalities (in income, consumption and wealth) higher would be the poverty.
- D) Unemployment may be eliminated if all are employed somewhere but poverty may not disappear.
- E) If all are employed productively and as per their eligibility, then poverty and unemployment can show a decline in their relative percentages.

Choose the correct statements:

- (1) A, B and D only
- (2) B, C and E only
- (3) C, D and E only
- (4) A, C, D and E only

15. Which of the following are the health programmes in India which are specifically **not** intended to reduce maternal and infant mortality?
- A) Pradhan Mantri Jan Arogya Abhiyan
 B) Central Government Health Scheme
 C) Pradhan Mantri Bhartiya Janaushadhi Pariyojana
 D) Janani Suraksha Yojana
- (1) A, B, C and D (2) A, B and C only
 (3) A and D only (4) B and C only
-
16. The land tenure that was held by two or more cultivators jointly was called as:
- (1) Shikmidar (2) Asami Shikmidari
 (3) Pattadari (4) Pot pattadari
-
17. In which work Vijayapuri was mentioned as a great Buddhist monastery that attracted students from various countries:
- (1) Kuvalayamala (2) Chhaddanta Jataka
 (3) Yasastilaka (4) Vikramarjuna Vijaym
-
18. Match the following:
- | | |
|------------------|-----------------------------|
| A) Hussain Sagar | i) Mohammad Quli qutub Shah |
| B) Purana Pul | ii) Hayat Bakshi Begum |
| C) Masab Tank | iii) Ibrahim Qutub Shah |
| D) Dar-ul-Shifa | iv) Hussain Shah-Wali |
- (1) A-iv B-iii C-i D-ii
 (2) A-iii B-ii C-iv D-i
 (3) A-iv B-iii C-ii D-i
 (4) A-iv B-ii C-iii D-i
-
19. In which of the following temples, the paintings of the Kakatiyas are not found?
- (1) Tripurantakam, Pillalamarri (2) Tripurantakam, Nagulapadu
 (3) Pillalamarri, Nagulapadu (4) Hanumakonda, Kondaparthi
-
20. Match the following commissions with the purposes for which they were setup
- | | |
|---------------------------------|---|
| A) V. Rangunath Rao Commission | i) Land committee Report |
| B) Koneru Ranga Rao Commission | ii) To study the problems of Jogins |
| C) Bhargav Commission | iii) Police firing in Hyderabad in 1952 |
| D) Jagan Mohan Reddy Commission | iv) To enquire on fake encounters |
- (1) A-i, B-ii, C-iii, D-iv
 (2) A-ii, B-i, C-iv, D-iii
 (3) A-iii, B-iv, C-i, D-ii
 (4) A-iv, B-iii, C-ii, D-i

21. Arrange chronologically the following incidents during 1968-69 Telangana movement.
- A) Reddy Hostel Convention
B) Dismissal of Telangana N.G.O. leader K.R. Amose
C) Formation of Telangana Pradesh Congress Committee
D) Observation of Telangana Women's Day.
- (1) A, B, C, D (2) B, A, D, C (3) A, C, B, D (4) C, A, D, B
-
22. Which one of the statements is not correct about Prof. K. Jayashankar
- (1) He represented Osmania University students demanding separate statehood for Telangana before the Fazl Ali commission
(2) He provided a strong ideological base for Telangana Rastra Samithi
(3) He extensively propagated the injustice done by Andhra leaders in matters of water, allocations and appointments.
(4) He has guided the Telangana Youth and provided leadership through an organisation called 'Telangana Vimochana Samithi'.
-
23. Arrange the following programmes of political joint action committee during Telangana movement in their chronological order.
- A) 'Congress ko Katham karo' - 'Telangana Hasil Karo'
B) Janagarjana Sabha
C) Sampurna Telangana Sadhana Deeksha
D) Palle palle pattalapaiki
- (1) A, B, C, D (2) B, D, C, A (3) C, A, D, B (4) D, C, A, B
-
24. Which of the products from the Telangana state received the Geographical Indication (GI) tags during 2017 and 2018?
- A) Adilabad dokra B) Cherial paintings
C) Pochampally ikat (logo) D) Siddipet gollabama
E) Silver filigree of Karimnagar F) Warangal durries
- Choose the correct answer:
- (1) A, B, C and F only
(2) B, D and F only
(3) A and F only
(4) C, D and E only
-

25. Arrange the following programmes launched by the Government of Telangana in a chronological order:

- | | |
|---------------------|------------------------|
| i) KCR kit | ii) Mission Bhagiratha |
| iii) Aasara Pension | iv) Aarogya Lakshmi |

The correct sequence/order is :

- | | |
|----------------------------|----------------------------|
| (1) (i), (ii), (iii), (iv) | (2) (iii), (iv), (ii), (i) |
| (3) (ii), (iv), (i), (iii) | (4) (iv), (iii), (i), (ii) |

26. Under the 'India Energy Efficiency Scale-Up Programme', in August, 2018 in New Delhi, Government of India and the World Bank signed an agreement for (in million dollars)

- | | |
|----------------------|----------------------|
| (1) \$ 1,500 million | (2) \$ 1,200 million |
| (3) \$ 600 million | (4) \$ 300 million |

27. Match the following:

Institution	Person
A) CEO of National Health Mission	i) Rajiv Ranjan Mishra
B) MD & CEO of National Skill Development Corporation	ii) Indu Bhushan
C) DG of National Mission for Clean Ganga	iii) Subhash Chandra Khuntia
D) Chairman of IRDAI	iv) Manish Kumar

Choose the correct pairs:

- | | | | |
|-----------|-------|-------|-------|
| (1) A-ii | B-iv | C-i | D-iii |
| (2) A-iii | B-iv | C-ii | D-i |
| (3) A-ii | B-i | C-iii | D-iv |
| (4) A-iv | B-iii | C-i | D-ii |

28. Which of the following statements are correct about the men's 800 metres event of 2018 Asian Games held in Indonesia?

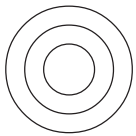
- A) Manjit Singh of India won the gold medal in men's 800 metres event of Asian Games 2018.
- B) Jinson Johnson clinched the silver medal.
- C) Manjit Singh clinched the gold with a timing of 1:46. 05 minutes.
- D) Manjit Singh, hailing from Haryana, was coached by Indian Army's Amreesh Kumar.

Choose the correct answer:

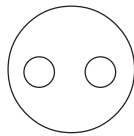
- | | |
|---------------------|---------------------|
| (1) A, B and C only | (2) A, B and D only |
| (3) B, C and D only | (4) A and C only |

32. Examine the following statements:
- A) The G 20 Digital Economy Ministerial Meeting was held during August 23-24, 2018 in Salta, Argentina.
 - B) The joint declaration issued after the Meeting in Salta includes proposals to reduce the digital gender divide, transform the government, measure the digital economy and accelerate digital infrastructure.
 - C) The theme of the meeting was “BREXIT-Building Consensus”.
- Choose the correct answer:
- (1) A, B and C (2) A and B only (3) A and C only (4) B and C only
-
33. Which of the following European country, India signed two agreements on combating money laundering and cooperation in the field of environment in September, 2018
- (1) Cyprus - Nicosia (2) Croatia - Zagreb
 - (3) Bulgaria - Sofia (4) Albania - Tirana
-
34. Which of the following is not the function of Inter-State Council?
- (1) Inquiring into Inter-State disputes
 - (2) Investigation into subjects of common interest to Union or States
 - (3) Giving full faith and credit to Public Acts, Records and judicial proceeding of Union or states
 - (4) Recommending for better coordination of states regarding policy or action
-
35. The Union Government exercises control over States in the following areas:
- i) Protection of Railways within the State
 - ii) Construction of maintenance of means of communication of national or military importance.
 - iii) Foreign Direct Investment
 - iv) Deployment of Armed Forces in the State
- Choose the correct answer:
- (1) (i), (ii) and (iv) (2) (ii) and (iv) (3) (ii) and (iii) (4) (i) and (ii)
-
36. Which one of the following statements with regard to National Advisory Council of India is not correct?
- (1) It was established through an Act of parliament
 - (2) It was established by UPA government
 - (3) It was headed by Sonia Gandhi
 - (4) It had jurisdiction over Union Government
-
37. The first Home Minister of India representing a Communist Party was:
- (1) D. Raja (2) Chaturanan Mishra
 - (3) Indrajit Gupta (4) Somnath Chatterjee
-
38. Which Article of the Constitution of India states that Directive Principles of State Policy are ‘fundamental in the governance of the country’
- (1) Article 37 (2) Article 38 (3) Article 36 (4) Article 45

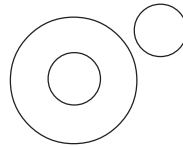
39. Which one of the following is not correct with regard to Saksham Scheme:
- (1) It's run by the Union Ministry of Human Resources Development
 - (2) It is aimed at all round development of adolescent boys
 - (3) It facilitates the education of young boys on gender sensitivity and moral behaviour
 - (4) It was started by UPA Govt.
-
40. The Rights of Persons with Disabilities Act 2016 provides for _____ of reservation to disabled persons in admissions in higher educational institutions.
- (1) 5%
 - (2) 4%
 - (3) 6%
 - (4) 3%
-
41. Among 12 persons sitting around a table one-half of them belong to club A, one-third of them belong to club B and one-fourth of them belong to both the clubs. The number of persons who do not belong to any of the two clubs is
- (1) 3
 - (2) 4
 - (3) 5
 - (4) 6
-
42. Five towns A, B, C, D and E are located as follows:
- i) A is to the east of B and to the west of C
 - ii) D is to the south west of B and
 - iii) E is to the north east of C
- The town which is farthest west is
- (1) B
 - (2) C
 - (3) D
 - (4) E
-
43. Observe the diagrams



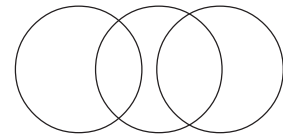
A



B



C



D

Match the diagram given in List-II that best illustrates the relationship among the three given in each item of List-I.

- List - I
- i) Bus, Scooter, Conveyance
 - ii) Women, Teachers, Doctors
 - iii) Days, Months, Years

- List - II
- a) A
 - b) B
 - c) C
 - d) D

The correct matching is

- (1) (i) → (b), (ii) → (c), (iii) → (a)
- (2) (i) → (b), (ii) → (d), (iii) → (a)
- (3) (i) → (d), (ii) → (b), (iii) → (c)
- (4) (i) → (d), (ii) → (a), (iii) → (c)

44. A person has 16 coins whose total value is Rs. 90/-. Each coin is worth either 10 rupees or 5 rupees only. Keeping all the 10 rupee coins for himself, how many additional 5 rupee coins does he need to pay a sum of Rs. 100/-?
- (1) 8 (2) 7 (3) 6 (4) 5

45. If $a * b = a + b + (a - b)^2$ and $a \circ b = (a + b)^3 - (a - b)^3$ for real numbers a and b then $(3 * 5) \circ (2 * 3) =$
- (1) 5986 (2) 5926 (3) 5876 (4) 5616

46. In each item in List-I you find two statements S_1 and S_2 followed by a conclusion C . you have to determine whether the conclusion C is valid, invalid or doubtful and match the same from those given in List-II.

List - I	List - II
i) S_1 : P is a neighbour of Q S_2 : Q is a neighbour of R C : P is a neighbour of R	A) Valid
ii) S_1 : P is taller than Q S_2 : Q is shorter than R C : R is taller than P	B) Invalid
iii) S_1 : P is younger than Q S_2 : R is younger than P C : Q is older than R	C) Doubtful

The correct matching is

- (1) (i) \rightarrow A, (ii) \rightarrow B, (iii) \rightarrow C
 (2) (i) \rightarrow B, (ii) \rightarrow C, (iii) \rightarrow A
 (3) (i) \rightarrow C, (ii) \rightarrow A, (iii) \rightarrow B
 (4) (i) \rightarrow B, (ii) \rightarrow A, (iii) \rightarrow C
-
47. Ice is to water just as
- (1) Milk is to Ghee (2) Curd is to Ghee
 (3) Butter is to Ghee (4) Oil is to Ghee
-
48. If SUCCESS is coded as UWEEGUU in a code language then in the same code language the code word for VICTORY is
- (1) UHBSNQX (2) XKEVQTA
 (3) XEKQVAT (4) UBHNSQX

49. In each item in List-I you find a sequence of numbers following a particular pattern and also a missing term in it. You have to match those terms from List-II.

List - I

List - II

- | | |
|---|--------------------|
| i) $11\frac{1}{9}, 12\frac{1}{2}, 14\frac{2}{7}, 16\frac{2}{3}, \text{---}$ | a) 82 |
| ii) 37, 50, 65, _____, 101 | b) 20 |
| iii) 2, 18, 50, 98, _____ | c) $17\frac{1}{7}$ |
| | d) 162 |

The correct matching is

- (1) (i) → (c), (ii) → (a), (iii) → (d)
 (2) (i) → (b), (ii) → (a), (iii) → (d)
 (3) (i) → (a), (ii) → (d), (iii) → (b)
 (4) (i) → (c), (ii) → (a), (iii) → (b)

50. The odd thing out of the following is

- (1) 11 (2) 21 (3) 31 (4) 41

51. A company spends 40%, 15%, 12% and 25% respectively under the heads A, B, C and D, and the balance under the head E. If the total budget is Rs.2880 lakhs then match the items mentioned in List-I with those from List-II

List - I

List - II

- | | |
|---|----------------|
| i) Allocation for head B | a) 5:1 |
| ii) The ratio of allocation for head A to that for head E | b) 345.6 lakhs |
| iii) Allocation for head C | c) 432 lakhs |
| | d) 2:3 |

The correct matching is

- (1) (i) → (c), (ii) → (d), (iii) → (b) (2) (i) → (b), (ii) → (a), (iii) → (c)
 (3) (i) → (b), (ii) → (d), (iii) → (c) (4) (i) → (c), (ii) → (a), (iii) → (b)

52. In an year, a month starts on a Monday. The date of the fourth day after the second Saturday in that month is

- (1) 19 (2) 18 (3) 17 (4) 16

53. In each item of List-I you can see a group of letters following a particular pattern and a missing term in it. Identify the missing term and match it with that given in List-II.

List - I	List - II
i) POQ, SRT, VUW, ____	a) TSR
ii) ZYX, ABC, WVU, DEF, ____	b) GHI
iii) DFI, GIL, JLO, ____	c) YXZ
	d) MOR
	e) KMO

The correct matching is

- (1) (i) → (e), (ii) → (b), (iii) → (d)
(2) (i) → (c), (ii) → (a), (iii) → (e)
(3) (i) → (c), (ii) → (a), (iii) → (d)
(4) (i) → (c), (ii) → (b), (iii) → (d)
-
54. In a queue consisting of 50 persons A is the tenth from the front while B is twenty-fifth from the last. If C is just at the middle of A and B then the position of C from the front is
- (1) Twentieth (2) Nineteenth
(3) Eighteenth (4) Seventeenth
-
55. A is the mother of B and C. If D is the husband of C then A is related to D as
- (1) Son-in-law (2) Mother-in-law
(3) Father-in-law (4) Daughter-in-law
-
56. Good teaching means
- (1) One, which helps the students to get good marks in examinations
(2) One which facilitates effective learning among students
(3) One which develops self confidence among students
(4) One which transmits upto date knowledge to students
-
57. The concept can best be taught by
- a) Summarising the main points
b) Establishing a good rapport with the learners
c) Ensuring the availability of teaching aids
d) Using simple, clear and relevant examples
(Which of the above two statements are correct?)
- (1) (a) and (b) (2) (a) and (d) (3) (b) and (d) (4) (b) and (c)
-

58. While teaching in the classroom, teacher's primary focus should be on
(1) The lesson (2) The method (3) The class (4) The students
-
59. Homework of the students needs to be corrected regularly because
(1) It helps the students to know their mistakes
(2) It helps the teacher to make the class well behaved
(3) Parents will be pleased to look at the home work books
(4) It will give a good impression about the teacher
-
60. When a high school student gives a wrong answer in a class, the best response of the teacher would be
(1) To give the correct answer
(2) To ask another student to answer the question
(3) To help the student to find out the correct answer
(4) To give an imposition to write the correct answer
-
61. Which one of the following is the least desirable attribute of a teacher?
(1) Imposing punishment on students
(2) Asking the students to learn by self-study
(3) Using lecture method in the class
(4) Giving home work
-
62. Before going to the class, a teacher should: first
(1) Obtain permission from the Head Master
(2) Ensure that the class is disciplined
(3) Have a proper plan of teaching and learning activities
(4) Ensure that the students are motivated to learn
-
63. If a teacher is not able to answer the question of a student, he should
(1) Say that he will answer after consultation
(2) Rebuke the student
(3) Say that the question is wrong
(4) Feel shy of his ignorance
-
64. Classroom discipline can be maintained effectively by
(1) Organizing activities according to needs and interests of the students
(2) Segregating the indisciplined students and keeping them away
(3) Knowing the cause of indiscipline and handling with stern hand
(4) Punishing the indisciplined students
-

65. Which of the following factors influenced you to choose the teaching profession. Choose the correct options given below.
- Great teachers
 - Advise of my parents
 - As it is a government job
 - Passion for teaching
- (1) (a) and (b) (2) (b) and (d)
(3) (a) and (d) (4) (b) and (c)
-
66. Which of the following statements is correct regarding inculcation of moral values among the students at school level.
- A separate subject on 'moral values' is to be introduced
 - Inculcating moral values through extracurricular activities
 - Inculcating moral values through co-curricular activities
 - Inculcating moral values with an integrated approach through curricular and all other activities
-
67. Which of the following alternative indicate correct matching
- | | |
|--|----------------------|
| i) Real education consists in drawing the best out of your self, what better book can there be than the book of humanity | a) S. Radhakrishna |
| ii) Education I mean which builds character, which develops mental power and the one which facilitates self-reliance | b) Mahatma Gandhi |
| iii) Education in the broadest sense of the term has a vital contribution in developing higher mind, its conscience and its vision | c) Sri Aurobindo |
| iv) It is the responsibility of education to channelise individuals vital energy for constructive purposes | d) Swamy Vivekananda |
- (i) (ii) (iii) (iv)
(1) (b) (d) (a) (c)
(2) (a) (d) (c) (b)
(3) (d) (c) (a) (b)
(4) (a) (b) (d) (c)
-

68. Inculcating moral values in schools is possible only when the activities are planned to have an impact in the _____
- (1) Cognitive domain (2) Psychomotor domain
(3) Affective domain (4) Cognitive and psychomotor domains
-
69. Professional ethics in teaching profession essentially depends upon
- (1) Teachers (2) Government (3) Society (4) Constitution
-
70. Which of the following statements are appropriate regarding improvement of professional ethics of teachers at school level. Choose the correct options among the options given below:
- a) Strict implementation of code of conduct and strict disciplinary measures for violation of code of conduct by the Government
b) Government puts in place realistic and attractive professional appreciation packages for teachers on a continuous basis
c) Comprehensive assessment of Teachers' performance annually by self and school committee, constituted for the purpose
d) Imposing penalty by way of withholding increments and promotions
- (1) (a) and (d) (2) (c) and (d) (3) (a) and (b) (4) (b) and (c)
-
71. Which of the following does not have a similar relationship to the pair of words that is given below.
- demonetisation : currency
- (1) desalination : salt (2) determination : term
(3) deforestation : forests (4) detoxification : drugs
-
72. Fill in the blanks with the right alternative to make it a meaningful sentence.
- Tina : should I ask the boss if he's upset at my coming late in the mornings?
Tanmoy : If he hasn't said anything about it, just _____ .
- (1) Let sleeping dogs lie (2) Let the beans spill out
(3) Let it bitten once, twice shy (4) Let the sleeping lions roar
-
73. Fill in the blank with the right alternative to make it a meaningful sentence.
- I know you're worried about the mortgage payment in January, but don't _____ .
- (1) cost pearls before swine.
(2) cross a bridge until you come to it.
(3) count your chickens before they hatch.
(4) Judge a book by its cover.
-

74. Choose the most appropriate words from the options given below to fill in the blanks in the following sentence:

Of the two major political parties in America, The Republican and The Democrats, Donald Trump represents the _____ and Hillary Clinton represent the _____ .

- (1) former, latter (2) former, later
(3) farmer, latter (4) farmer, later

75. Each sentence has a pair of words numbered A and B. Select the most appropriate word to make each of the five sentences meaningful. Then from the options given, choose the best one.

- a) As the water began to rise over / above the danger mark, the signs of an imminent flood were clear. (A) (B)
- b) It surprised her how last Autumn, she had loathed / loathd him at the very sight of him. (A) (B)
- c) You could have knocked me with a fender / feather. I wouldn't have been hurt. (A) (B)
- d) The novel is suppositively / supposedly based on a true story. (A) (B)
- e) His explanation for missing the meeting was credulous / credible. (A) (B)
- (1) ABBA (2) BABBA (3) BABBB (4) ABBBB

76. Select the most appropriate word each of the following sentences to make meaning full from a to e. Then, from the options given, choose the best one.

- a) He is a child progeny / prodigy with an extra ordinary skill. (A) (B)
- b) An Immigrant / emigrant is a person who comes to live permanently in a foreign country. (A) (B)
- c) They regretted because their decisions were impulsive / impulsively. (A) (B)
- d) A gun battle had proceeded / preceeded the explosions during the war. (A) (B)
- e) We held a meeting to felicitate / facilitate Prof. Kachru from Illinois. (A) (B)
- (1) ABBAB (2) BAABA (3) BABAB (4) ABBA

77. Choose the correct rearrangement of the following sentences numbered a-e to make it a meaningful paragraph.
- a) Some people develop just one gallstone, while others may develop many gallstones at the same time.
 - b) But, occasionally, a gallstone can get stuck in a duct in the gallbladder, triggering intense abdominal pain, called biliary colic.
 - c) Gallstones are solid material formed from the digestive fluid in the gallbladder, a small, pear-shaped organ located under the liver.
 - d) In most cases, they do not cause any symptoms and do not require treatment.
 - e) They could be as small as a grain of sand or as large as a golf ball.
- (1) a, c, e, b, d
 - (2) c, e, d, b, a
 - (3) c, d, e, a, b
 - (4) d, e, a, b, c
-

78. Choose the right alternative to fill in the blank that makes it a meaningful sentence.
Although, it has been more than 50 years since Satyajit Ray made Pather Panchali, _____ refuse to go away from the mind.
- (1) the haunting images
 - (2) its haunting images
 - (3) the haunt of its images
 - (4) its haunted images
-

79. Answer the following question after reading the passage.
- The omnipotent dictator is the least likely to have an authority. Gandhiji had no power to compel, punish or reward. His power was nil, his authority was enormous. It came out of love. Living with him, one could see why he was loved; he loved. Not merely in isolated incidents, but day in and day out, morning, noon and night, for decades, in every act and word he had manifested his love of individuals and of mankind.
- ‘The omnipotent dictator is least likely to have any authority’. Select the most likely reason for this.
- (1) a powerful dictator exercises control over others only temporarily.
 - (2) a ruler with only unrestricted authority is not likely to win the love and respect of his people.
 - (3) a ruler with absolute power is seldom trusted
 - (4) a person with supreme authority generates obedience through fear in the minds of the people.
-

80. Which of the following sentences is written with correct punctuation marks?
- (1) “One cannot fool oneself for a long time”, cleaning her glasses the daughter in law spoke “but you have tried to keep yourself foolish for a pretty long time.”
 - (2) “One cannot fool oneself for a long time,” cleaning her glasses the daughter-in-law spoke, “but you have tried to keep yourself foolish for a pretty long time”.
 - (3) “One cannot fool oneself a long time,” cleaning her glasses the daughter in law spoke but, you have tried to keep yourself foolish for a pretty long time.”
 - (4) “One cannot fool oneself for a long time,” cleaning her glasses the daughter-in-law spoke, “but you have tried to keep yourself foolish for a long time.”
-

81. Select the part of the following sentence that has an error.

(A)	(B)	(C)	(D)
Judge in her / prevailed upon the wife / and she sentenced / her husband to prison.			
(1) A	(2) B	(3) C	(4) D

82. Fill in the blanks with a, an, the, no article.

There's _____ giant tortoise in _____ Galapagos Islands nicknamed _____ Lonesome George who has never found _____ mate.

- | | |
|------------------------------------|---------------------------|
| (1) the, no article, no article, a | (2) a, no article, the, a |
| (3) a, the, no article, a | (4) a, the, the, the |
-

83. Which of the following phrases given below the sentence should replace the underlined phrases to make the sentence grammatically correct?

He is carrying the books for several months before the examination is conducted in October 2015.

- (1) has been carrying, was conducted
 - (2) had carried, conducted
 - (3) had been carrying, was conducted
 - (4) had carried, has been conducted
-

84. Which of the following phrases given below the sentence should replace the phrases underlined to make the sentence grammatically correct?

The trio divested of their powers soon after named by CBI a few months ago.

- | | |
|------------------------------|------------------------------------|
| (1) is divested, being named | (2) was divested, had been named |
| (3) has divested, were named | (4) had been divested, being named |
-

85. Which of the following is not a grammatically correct sentence?

- (1) Two-thirds of the mailing list has been typed.
 - (2) Ramesh is one of our employees who is always punctual.
 - (3) That Rs. 2,00,00,000 was inheritance from my grandfather.
 - (4) Neither the Vice-Chancellors nor the Chancellor was in favour of the decision.
-

86. Choose the correct matching of the following blanks in the sentences given in column 'A' with the appropriate alternative provided in column 'B'.

Column - A	Column - B
i) We asked ____ called us to call back later	a) whomever
ii) He was free to marry ____ he chose	b) whoever
iii) She asked me with ____ I had discussed	c) whose
iv) He is a man ____ opinion I respect	d) whom
v) I decided to buy a present ____ I liked and for the person I'm assigned in the gift exchange program	e) whose ever
	f) whatever

(1) (i)-f, (ii)-a, (iii)-c, (iv)-d, (v)-e
(2) (i)-b, (ii)-a, (iii)-d, (iv)-c, (v)-f
(3) (i)-d, (ii)-f, (iii)-c, (iv)-a, (v)-e
(4) (i)-e, (ii)-d, (iii)-a, (iv)-c, (v)-b

87. Which of the following is a grammatically correct statement?

- (1) When to start is yet another question.
 - (2) I don't like to telephoning him at his office.
 - (3) This is a never-to-be-forgotten days.
 - (4) He was the first who can reach the top of the mountain.
-

88. Which of the following statements has the subject in agreement with verb?

- (1) The minister along with the bodyguards were killed.
 - (2) In China, 80% of the population live in rural areas.
 - (3) Each of the Williams sisters are the terrific tennis players.
 - (4) The fact that in our party itself there are many dissidents, who attempt to destabilise the government, is quite disheartening.
-

89. Which of the following statements does not have the subject in agreement with verb?
- (1) When life gives you a hundred reasons to break down and cry, life also shows that you have a million reasons to smile and laugh.
 - (2) The reason people find it so hard to be happy in that they always see the past better than it was, the present worse than it is and the future less resolved than it will be.
 - (3) The pancreas play an essential role in converting the food we eat into fuel for the body's cells.
 - (4) None of the sentences mentioned above has an error related to concord. i.e., subject in agreement with verb in tense, number and gender.
-
90. Which one of the following sentences is not written inappropriately in passive voice?
- (1) They are believed to had built these forts in the twelfth century.
 - (2) I was selected for the armed forces twice.
 - (3) The prisoner as known to have assault the inmate earlier too.
 - (4) We know that the prisoner had assaulted the inmate earlier too.
-
91. Which of the following is an ungrammatical statement?
- (1) Those who were caught hunting are now punished for poaching.
 - (2) The manager wanted all the local people to be exterminated who did not obey his orders about the rubber that he required them to bring in.
 - (3) In most areas the lands taken over were actually grazing tracts used regularly by pastoralists.
 - (4) Most of the increase was in the Great plains where new areas was being ploughed to extend cultivation.
-
92. Which of the following statements is written correctly in reported speech?
- (1) The mother exclaimed admiringly that it is very clever of him to have solved the puzzle so quickly.
 - (2) The girl said it gave her great pleasure to be here this evening.
 - (3) She suggested them to wait until she return.
 - (4) She said that she did not want to see him. He told her that he would send her a postcard.
-
93. Identify the incorrect use of degrees of comparison among the following sentences.
- (1) Ram is happier than Raj.
 - (2) Tina helped Shiela more than she helped Rita when there was a difficult task.
 - (3) He is the thinnest person of all in our college.
 - (4) No other man is as richer as Mukul in the city.
-

94. Choose the correct form of the following statement in positive degree.
Hercules was stronger than any other man.
(1) Hercules was the strongest man in the world.
(2) No other man was so strong as Hercules.
(3) No other man was as stronger as Hercules.
(4) Hercules was stronger than most other man in the world.
-
95. A sentence has been given in passive voice. Out of the four sentences given below, choose the one that best expresses the same in active voice.
I had been warned about the weather before I went to Scotland.
(1) Everyone had warned me about the weather before I went to Scotland.
(2) Everyone had warned me about the weather before I had been to Scotland.
(3) Everyone warned me about the weather before I have gone to Scotland.
(4) Everyone warned me about the weather before I went to Scotland.
-
96. Fill in the blanks with suitable prepositions.
The children ran ____ the bank, ____ the bridge and ____ the path.
(1) over, across, under (2) down, over, with
(3) with, over, on (4) down, over, along
-
97. Fill in the blanks with suitable phrasal verb to make it a meaningful sentence.
If you're on the road on Saturday night, _____ drunk drivers. Don't just _____.
(1) look for, look (2) look at, look out
(3) look out for, look on (4) look around, look out
-
98. Choose the right alternative among the following sentences which has an incorrect usage of conjunction.
(1) No sooner had we started the experiment than there was a power cut and we had no electricity.
(2) I will be your friend whether you stay here or move away.
(3) I want to go either to Disney world or to Sea World.
(4) They had two books but neither work.
-
99. Which of the following is an antonym of the underlined word in the sentence?
We are sitting through a multitude of soporific briefings.
(1) slumberous (2) narcotic (3) somnolent (4) exhilarative
-
100. Which of the alternatives is closest in meaning to the underlined word in the following sentence?
Shashi know that Divya could be an implacable foe.
(1) vindictive (2) benevolent (3) complaisant (4) circumspect
-

P11

Booklet Code **B**

SPACE FOR ROUGH WORK
